





1) Complète les additions (2)

Opérations : ...../10

 +  = \_\_\_\_\_

 +  = \_\_\_\_\_

 +  +  = \_\_\_\_\_

 +  = \_\_\_\_\_

2) Calcule (5,5)

1+1 = \_\_\_\_\_

2+2 = \_\_\_\_\_

3+3 = \_\_\_\_\_

4+4 = \_\_\_\_\_

5+5 = \_\_\_\_\_

7+3 = \_\_\_\_\_

9+2 = \_\_\_\_\_

8+2 = \_\_\_\_\_

9+3 = \_\_\_\_\_

10+3 = \_\_\_\_\_

8+4 = \_\_\_\_\_

3) Calcule (2,5)

6-4 = 2



8-3 = \_\_\_\_\_

5-2 = \_\_\_\_\_

9-3 = \_\_\_\_\_

10-6 = \_\_\_\_\_

7-4 = \_\_\_\_\_

4) Compte et barre (2)

Connaissance des nombres : ...../10

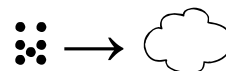
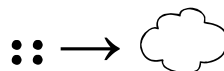
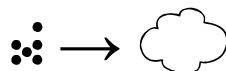
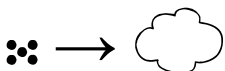
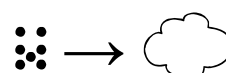
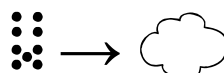
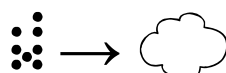
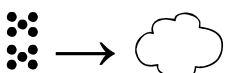
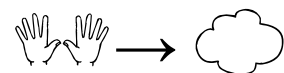
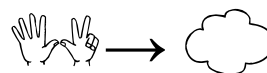
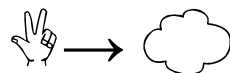
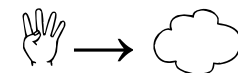
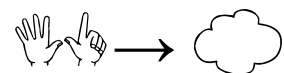
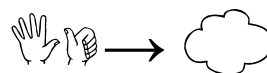
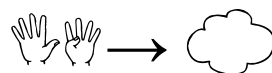
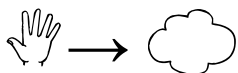








4) complète (4)



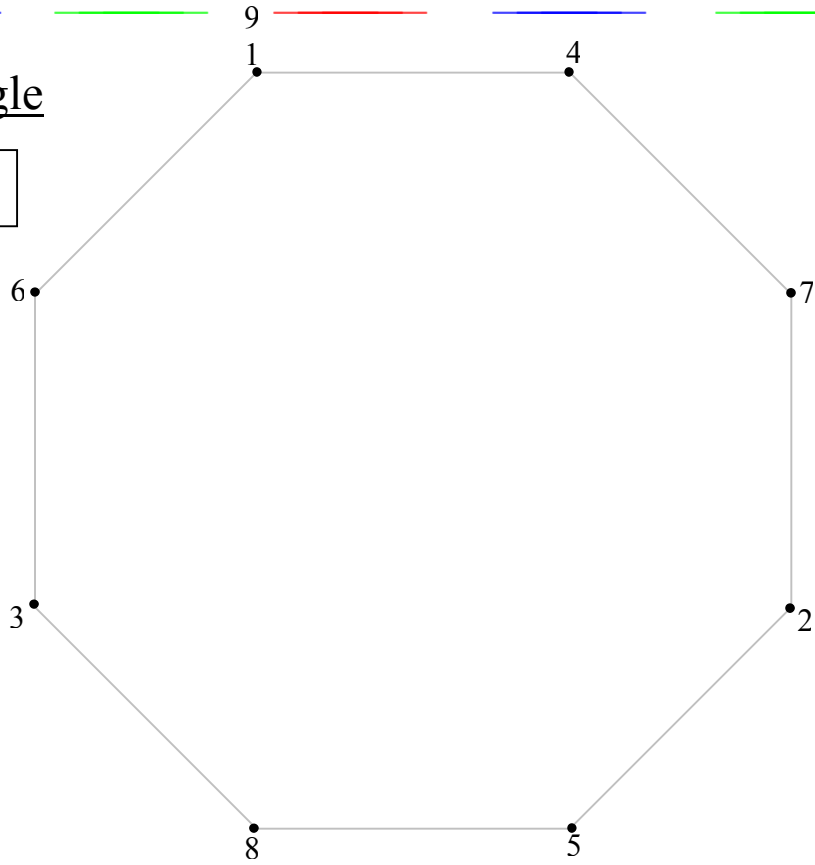
5) dictée (4) série 1 : jusqu'à 10 ; série 2 : jusqu'à 19

série 1

série 2

6) Trace à la règle

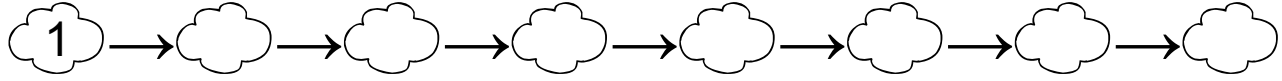
Géométrie : .../10



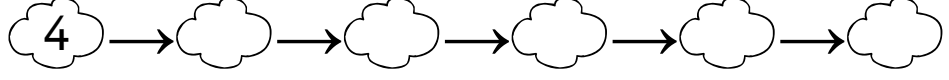
7) Complète Calcul rapide : .../10

1	2	3	4	5	6	7	8	9	10	11	12	13	14	15	16	17	18	19	20
---	---	---	---	---	---	---	---	---	----	----	----	----	----	----	----	----	----	----	----

8) a) avance de 2 en 2



b) avance de 3 en 3



c) avance de 4 en 4



d) relie \_\_\_\_\_ →

10