

Entoure les paquets de 10 et complète

complète

<p>a</p>	<p>24</p> <p>20</p> <p><input type="text"/></p>
<p>b</p>	<p>28</p> <p>20</p> <p><input type="text"/></p>
<p>c</p>	<p>32</p> <p><input type="text"/></p> <p>2</p>
<p>d</p>	<p><input type="text"/></p> <p>30</p> <p>6</p>
<p>e</p>	<p><input type="text"/></p> <p>30</p> <p>9</p>

Dizaines et unités

Date : _____




--	--	--	--	--	--	--	--	--	--	--	--	--	--	--	--	--	--	--	--

1) Entoure le nombre de boules demandé

15 boules

24 boules




37 boules



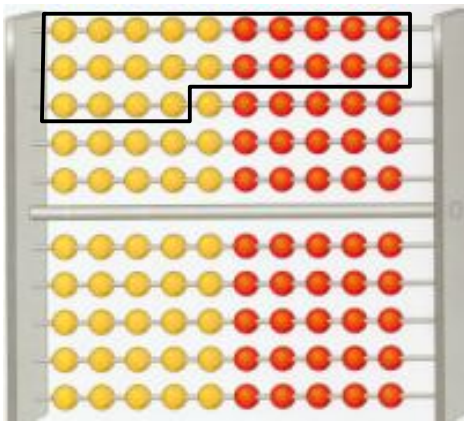
20 boules

36 boules

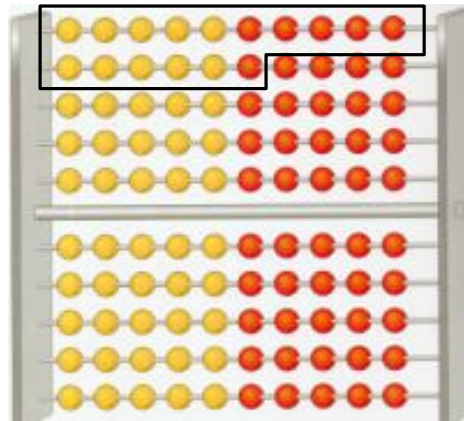
18 boules




2) complète l'égalité comme l'exemple.




$24 = 10 + 10 + 4$



$\text{cloud} = \underline{\hspace{2cm}}$




$\text{cloud} = \underline{\hspace{2cm}}$




$\text{cloud} = \underline{\hspace{2cm}}$

Compte en avançant

10	11	12	13	14	15	16	17	18	19	20	21	22	23	24	25	26	27	28	29
----	----	----	----	----	----	----	----	----	----	----	----	----	----	----	----	----	----	----	----

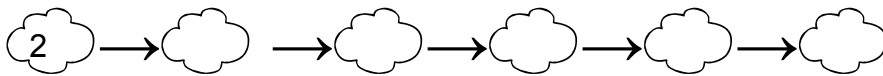
De 2 en 2  ->




De 3 en 3  ->



De 5 en 5  ->



$16 + 4$  = ____

$18 + 5$  = ____


$24 + 3$  = ____

$14 + 4$  = ____

$20 + 7$  = ____

$10 + 6$  = ____

$20 + 3$  = ____


$10 + 2$  = ____

$18 + 6$  = ____


$15 + 5$  = ____


$13 + 4$  = ____

$19 + 4$  = ____

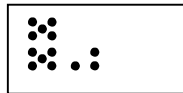

$23 + 5$  = ____

$22 + 5$  = ____

$21 + 7$  = ____

$13 + 3$  = ____

Colorie : 13 - 23 - 15 - 25




$10 + 3$

$10 + 10 + 3$

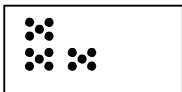
$10 + 5$

$10 \ 5$

$10 \ 2 \ 1$

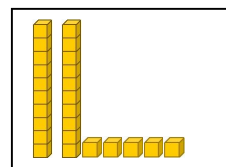
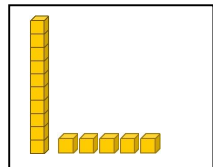
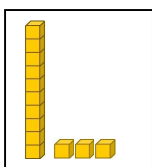
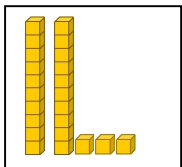


$10 \ 10 \ 5$



$10 + 10 + 5$

$10 \ 10 \ 2 \ 1$



Entraînements :
tables d'addition (3 séances)

Date : _____

entraînement 1

+	6	8	7	9	10
2					
3					
5					
4					
1					

+	3	6	4	5	2
7					
3					
2					
5					
4					

+	6	8	9	7
8				
9				
7				
6				
10				

entraînement 2

+	6	9	8	10	7
2					
4					
3					
5					
1					

+	6	5	7	4	0
6					
2					
3					
5					
4					

+	9	7	8	10
6				
8				
7				
9				
10				

entraînement 3

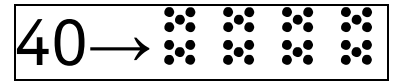
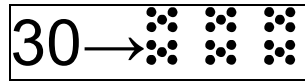
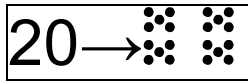
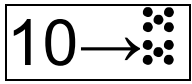
+	2	3	4	5	6
2					
4					
3					
5					
6					

+	6	5	7	4	0
6					
5					
7					
4					
0					

+	8	9	7	10
6				
7				
8				
10				
9				

0	1	2	3	4	5	6	7	8	9	10	11	12	13	14	15	16	17	18	19	20	21	22	23	24	25	26	27	28	29
---	---	---	---	---	---	---	---	---	---	----	----	----	----	----	----	----	----	----	----	----	----	----	----	----	----	----	----	----	----



30	31	32	33	34	35	36	37	38	39	40	41	42	43	44	45	46	47	48	49
----	----	----	----	----	----	----	----	----	----	----	----	----	----	----	----	----	----	----	----




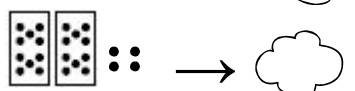
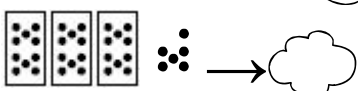
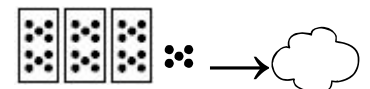
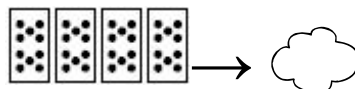
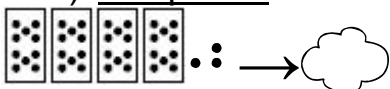
a) entoure les paquets de 10 et complète.

	$10 + 10 + 10 + 10 + 3$	43

b) Complète les dessins



c) complète :



$10 + 10 + 10 + 10 + 6 =$


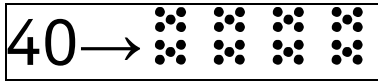
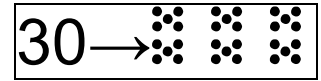
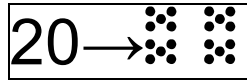
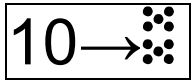
$10 + 10 + 10 + 10 =$

$10 + 10 + 4 =$

$10 + 10 + 10 + 7 =$

$10 + 3 =$

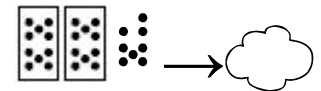
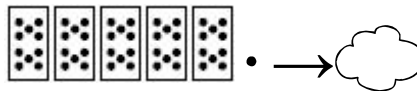
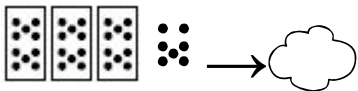
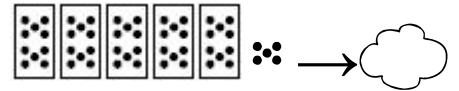
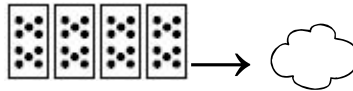

$10 + 10 + 8 =$



a) entoure les paquets de 10 et complète.

	$10 + 10 + 10 + 10 + 3$	43

b) complète :



$10 + 10 + 10 + 10 + 10 =$

$10 + 10 + 10 + 10 =$

$10 + 10 + 10 + 10 + 10 + 2 =$

$10 + 10 + 10 + 10 + 10 + 7 =$

$10 + 8 =$

$10 + 10 + 10 + 5 =$

c) compte en avançant

10	11	12	13	14	15	16	17	18	19	20	21	22	23	24	25	26	27	28	29	30	31	32	33	34	35	36	37	38	39
40	41	42	43	44	45	46	47	48	49	50	51	52	53	54	55	56	57	58	59	60	61	62	63	64	65	66	67	68	69

De 2 en 2 40 → → → → → → → → → →

De 3 en 3 28 → → → → → → → → → →

De 4 en 4 22 → → → → → → → → → →

Additionner les dizaines.

Date : _____

$30 + 20 + 4 = 54$

□□□ □□ ::

$20 + 10 + 6 = \underline{\quad}$

$20 + 20 + 3 = \underline{\quad}$

$10 + 30 + 4 = \underline{\quad}$

$20 + 8 = \underline{\quad}$

$20 + 20 = \underline{\quad}$

$40 + 10 + 6 = \underline{\quad}$

$20 + 20 + 7 = \underline{\quad}$

$20 + 20 + 10 + 5 = \underline{\quad}$

$30 + 6 = \underline{\quad}$

$20 + 30 = \underline{\quad}$

Révisions et entraînement

+	8	5	4	6	3
7					
2					
6					
5					

+	9	4	2	7	6
8					
3					
5					
9					

+	8	10	4	2
10				
3				
6				
1				

$10 - 8 = \underline{\quad}$

$10 - 6 = \underline{\quad}$

$9 - 4 = \underline{\quad}$

$10 - 5 = \underline{\quad}$

$9 - 3 = \underline{\quad}$

$8 - 5 = \underline{\quad}$

$9 - 7 = \underline{\quad}$

$8 - 4 = \underline{\quad}$

$10 - 6 = \underline{\quad}$

$5 - 5 = \underline{\quad}$

$6 - 0 = \underline{\quad}$

$3 - 1 = \underline{\quad}$

$8 - 5 = \underline{\quad}$

$5 - 3 = \underline{\quad}$

$6 - 1 = \underline{\quad}$

$7 - 4 = \underline{\quad}$


10




20




30



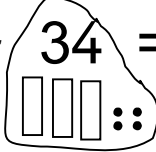
40



50



Complète comme l'exemple : $34 = 10 + 10 + 10 + 4$



26 = _____

38 = _____

23 = _____

52 = _____

17 = _____

45 = _____

24 = _____

50 = _____

6 = _____

41 = _____

Entraînement et révisions

calcule

$10 - 3 = \underline{\quad}$

$8 - 4 = \underline{\quad}$

$6 - 1 = \underline{\quad}$

$10 - 5 = \underline{\quad}$

$9 - 7 = \underline{\quad}$

$8 - 6 = \underline{\quad}$

$9 - 5 = \underline{\quad}$

$7 - 4 = \underline{\quad}$

$10 - 2 = \underline{\quad}$

$5 - 4 = \underline{\quad}$

$6 - 3 = \underline{\quad}$

$3 - 2 = \underline{\quad}$

20	21	22	23	24	25	26	27	28	29	30	31	32	33	34	35	36	37	38	39
----	----	----	----	----	----	----	----	----	----	----	----	----	----	----	----	----	----	----	----

40	41	42	43	44	45	46	47	48	49	50	51	52	53	54	55	56	57	58	59
----	----	----	----	----	----	----	----	----	----	----	----	----	----	----	----	----	----	----	----

Compte en avançant

De 2 en 2 20 → → → → → → → →

De 3 en 3 21 → → → → → → → →

De 4 en 4 25 → → → → → → → →







De 5 en 5 20 → → → → → → → →

Date : _____

< : plus petit que 2 < 5

> : plus grand que 8 > 4

Complète avec < ou >

 ☁ > ☁	 ☁ _____ ☁
 ☁ _____ ☁	 ☁ _____ ☁
 ☁ _____ ☁	 ☁ _____ ☁

34 _____ 46

48 _____ 34

19 _____ 31

7 _____ 12

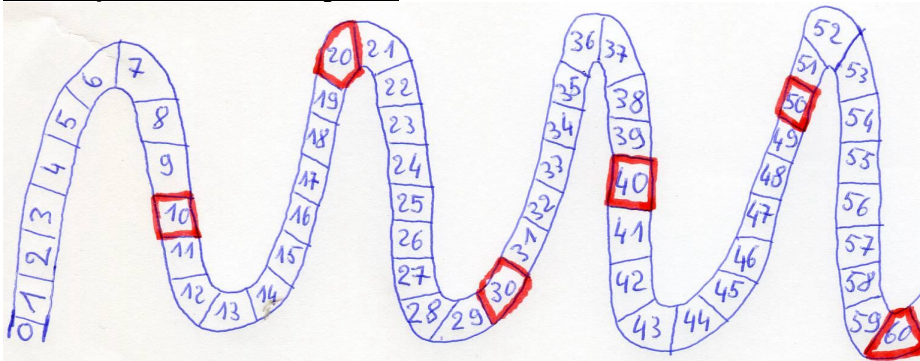
42 _____ 27

50 _____ 42

10 _____ 20

18 _____ 32

Compte en avançant



De 2 en 2  37 → ☁ → ☁ → ☁ → ☁ → ☁ → ☁ → ☁ → ☁ → ☁

De 3 en 3  28 → ☁ → ☁ → ☁ → ☁ → ☁ → ☁ → ☁ → ☁ → ☁

De 4 en 4  20 → ☁ → ☁ → ☁ → ☁ → ☁ → ☁ → ☁ → ☁ → ☁

<p>Il y a 10 canards dans la mare. 4 canards partent et volent.</p> <p>Il restecanards dans la mare.</p>	<p>_____ = _____</p>
<p>Il y a déjà 10 pies sur le mur. Puis 7 pies arrivent.</p> <p>Après, il y apies sur le mur</p>	<p>_____ = _____</p>
<p>Arthur a 10€. Il achète un ballon et il donne 4€ à la marchande.</p> <p>Après, Arthur a€</p>	<p>_____ = _____</p>
<p>Carine a 10 images. Sa copine Marie lui donne 6 images.</p> <p>Après, Carine aimages.</p>	<p>_____ = _____</p>

Mamie a acheté :
4 robes à 10€ chacune
et une bague à 5€

Mamie a donné€ à la
marchande.

Dessin :

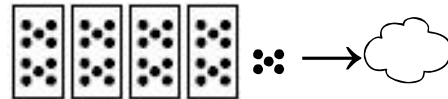
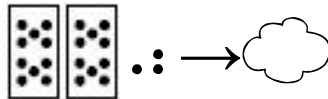
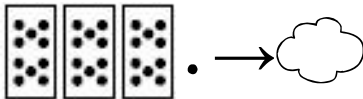






Calcul :
_____ = _____

+	6	8	9	4	7
2					
5					
6					
8					
4					

+	7	10	3	2	1
8					
9					
5					
7					
2					

+	9	8	10	7
8				
9				
10				

1) Complète :



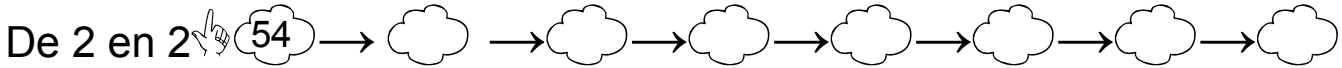
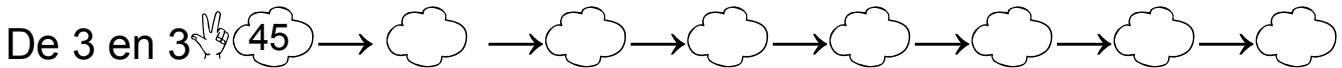
$10+10+10+10+10 = \underline{\quad}$
 $10+10+10+10+10+10+4 = \underline{\quad}$

$10+10+10+10+10+10 = \underline{\quad}$
 $10+10+10+10+10+1 = \underline{\quad}$

2) Complète :

40			43	44			47	49			51	52	53				56	57		
	61		63		65	66		68												

3) Compte en avançant



4) Complète comme l'exemple : $34 = 10 + 10 + 10 + 4$
 ::

64 = _____


53 = _____

51 = _____


62 = _____

5) Entoure


65 boules

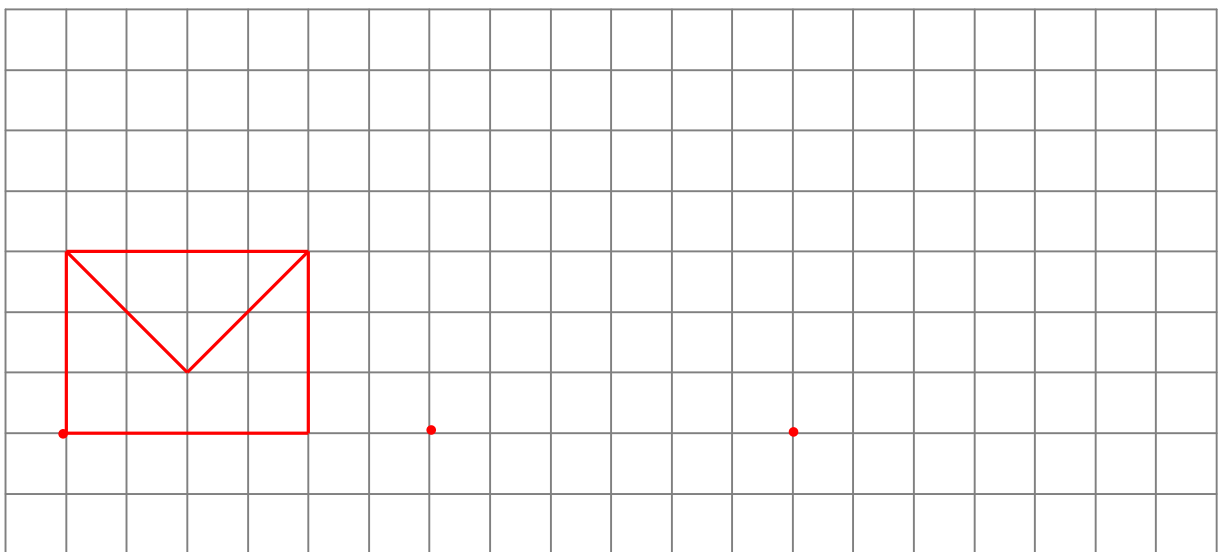
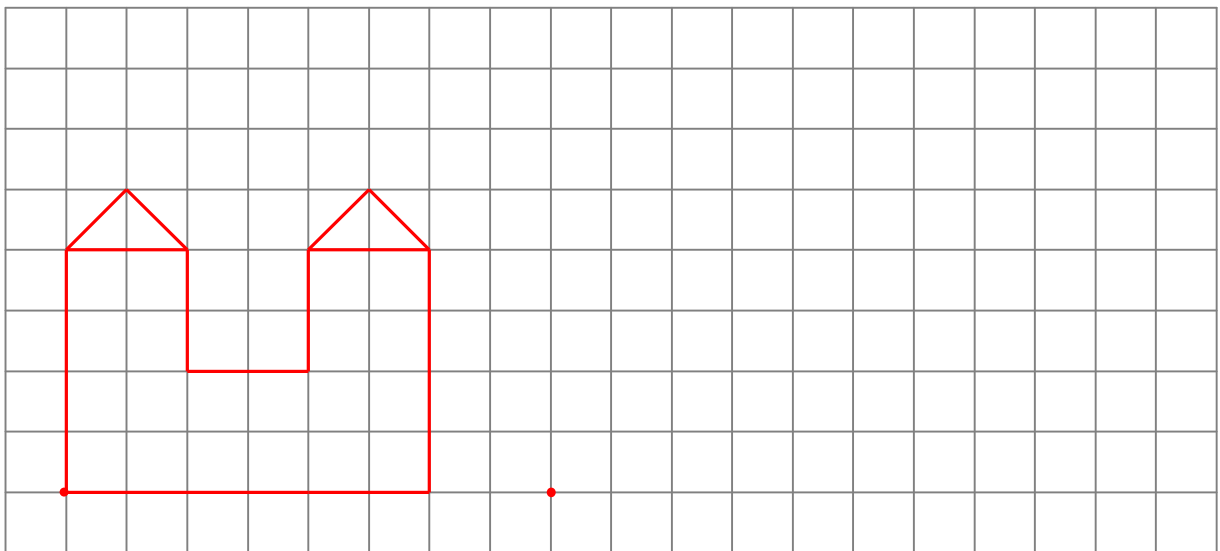
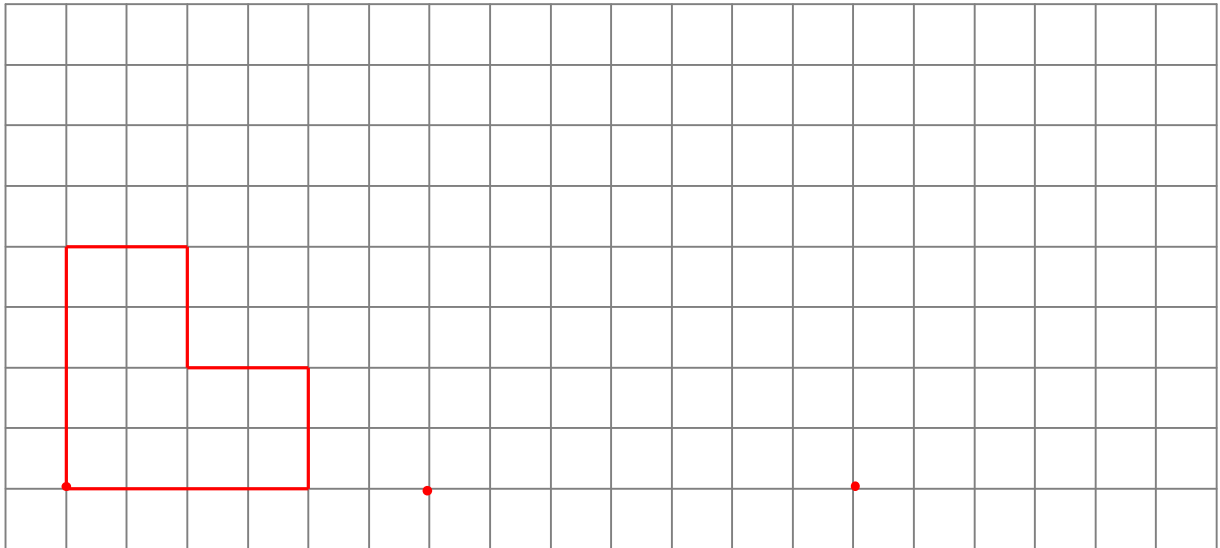


54 boules



62 boules







< : plus petit que 2 < 5

> : plus grand que 8 > 4

Complète avec < ou >





 _____ > _____



 _____ _____



 _____ _____





 _____ _____



 _____ _____



 _____ _____



 _____ _____



 _____ _____

25 _____ 36

57 _____ 24

30 _____ 18

46 _____ 28

17 _____ 41

29 _____ 50

37 _____ 54

41 _____ 23

36 _____ 22

9 _____ 22


24 _____ 8


7 _____ 20

Séance 1

20 21 22 23 24 25 26 27 28 29 30 31 32 33 34 35 36 37 38 39 40 41 42 43 44 45 46 47 48 49

50 51 52 53 54 55 56 57 58 59 60 61 62 63 64 65 66 67 68 69

De 2 en 2  33 → ☁ → ☁ → ☁ → ☁ → ☁ → ☁ → ☁

De 4 en 4  39 → ☁ → ☁ → ☁ → ☁ → ☁ → ☁ → ☁

c) calcul


+	3	9	8	5	4
6					
7					
3					
5					


+	9	6	10	7	3
8					
9					
4					
1					


Séance 2

20 21 22 23 24 25 26 27 28 29 30 31 32 33 34 35 36 37 38 39 40 41 42 43 44 45 46 47 48 49

50 51 52 53 54 55 56 57 58 59 60 61 62 63 64 65 66 67 68 69

De 2 en 2  21 → ☁ → ☁ → ☁ → ☁ → ☁ → ☁ → ☁

De 3 en 3  42 → ☁ → ☁ → ☁ → ☁ → ☁ → ☁ → ☁

De 4 en 4  37 → ☁ → ☁ → ☁ → ☁ → ☁ → ☁ → ☁

c) calcul

+	4	8	6	7	3
6					
9					
2					
4					

+	9	5	10	8	3
6					
9					
7					
4					