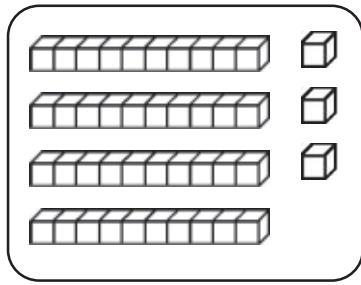
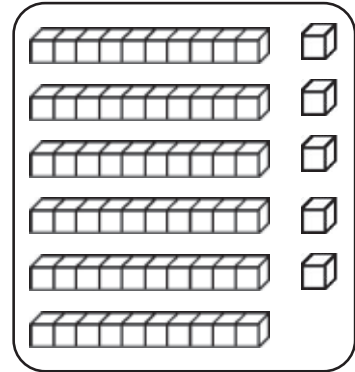


## La soustraction posée.

Observe la soustraction en colonnes, puis barre les dizaines et unités en trop sur le dessin. Ecris les résultats.

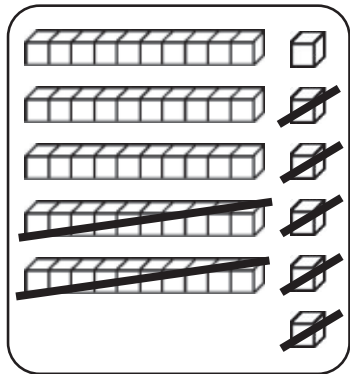


	d	u
	4	3
-	2	1
<hr/>		
	.....	.....

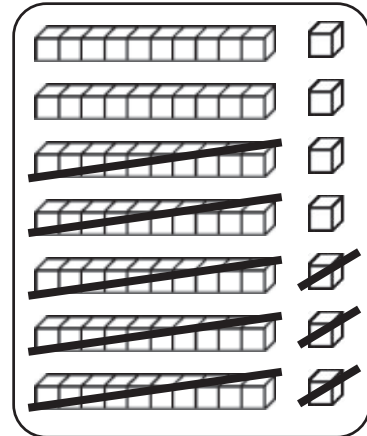


	d	u
	6	5
-	3	4
<hr/>		
	.....	.....

Observe le dessin, puis écris la soustraction représentée et calcule-la.



	d	u
	.....	.....
-	.....	.....
<hr/>		
	.....	.....



	d	u
	.....	.....
-	.....	.....
<hr/>		
	.....	.....

Calcule.

	d	u
	4	3
-	2	1
<hr/>		
	.....	.....

	d	u
	5	8
-	1	7
<hr/>		
	.....	.....

	d	u
	5	6
-	3	2
<hr/>		
	.....	.....

	d	u
	8	9
-	3	7
<hr/>		
	.....	.....

	d	u
	9	4
-	3	4
<hr/>		
	.....	.....

Pose les soustractions en colonnes, puis calcule.

$45 - 14$

$56 - 25$

$68 - 35$

$77 - 42$

$85 - 63$

	.....
-	.....
<hr/>	
	.....

	.....
-	.....
<hr/>	
	.....

	.....
-	.....
<hr/>	
	.....

	.....
-	.....
<hr/>	
	.....

	.....
-	.....
<hr/>	
	.....