

Evaluation : l'addition

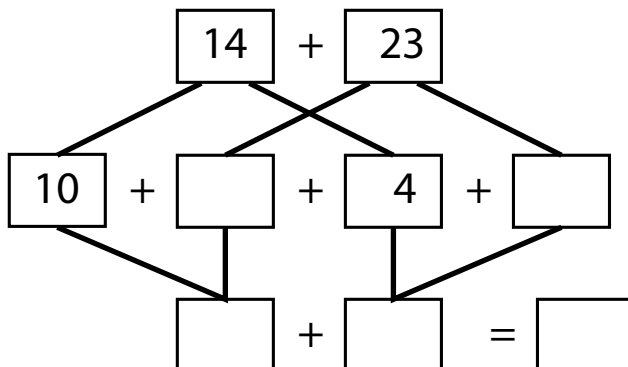
Nom:

Je sais poser l'addition :

Je sais décomposer les nombres pour calculer :

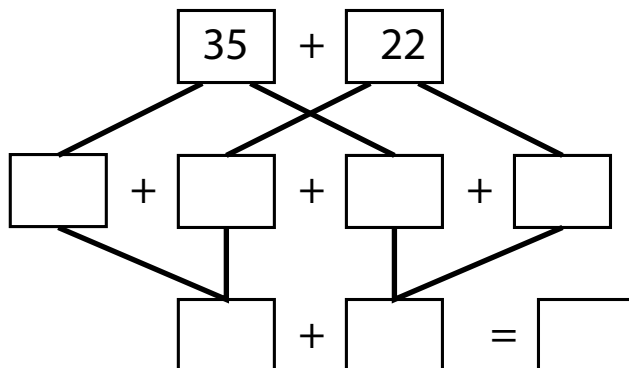
$$14 + 23$$

d	u
<hr/>	
+	
<hr/>	
=	



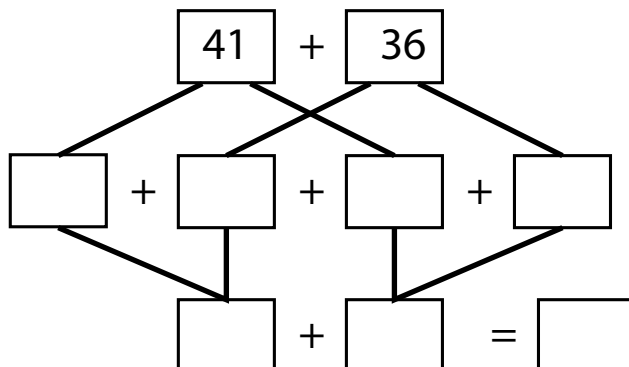
$$35 + 22$$

d	u
<hr/>	
+	
<hr/>	
=	



$$41 + 36$$

d	u
<hr/>	
+	
<hr/>	
=	



$$53 + 34$$

d	u
<hr/>	
+	
<hr/>	
=	

