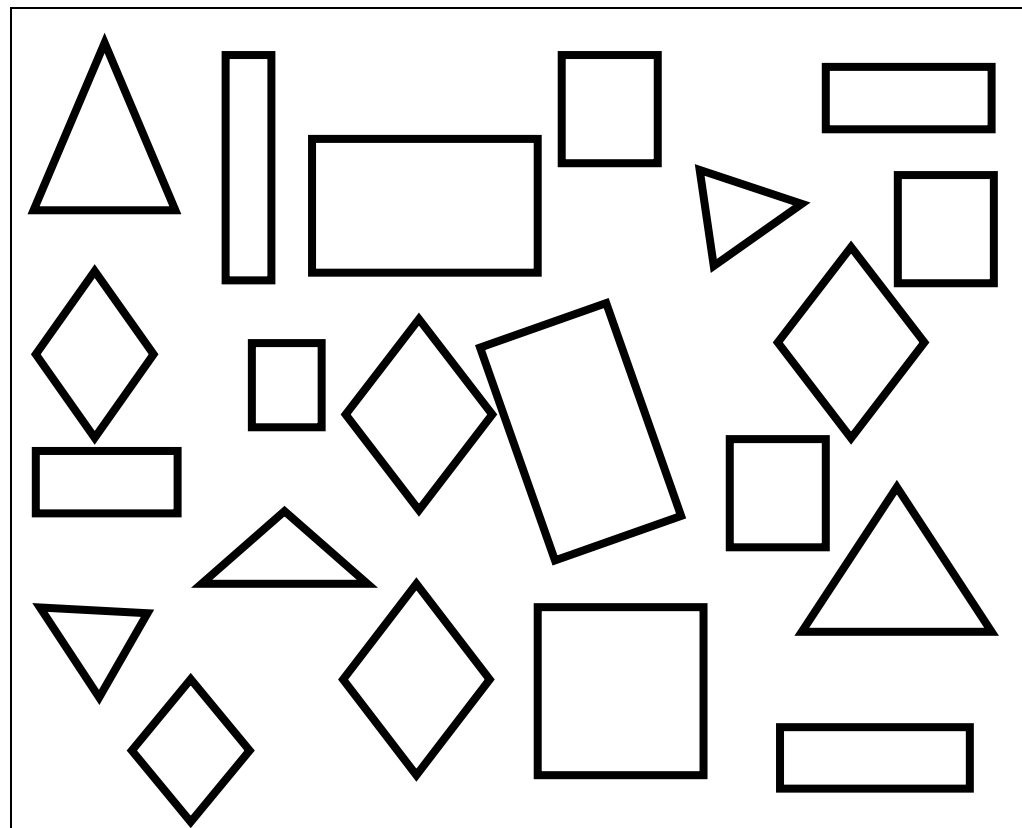






Ecris le nombre qui convient

MATH

formes géométriques









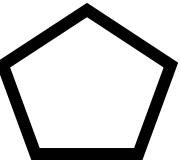
			

1 2 3 4 5 6 7 8 9 10



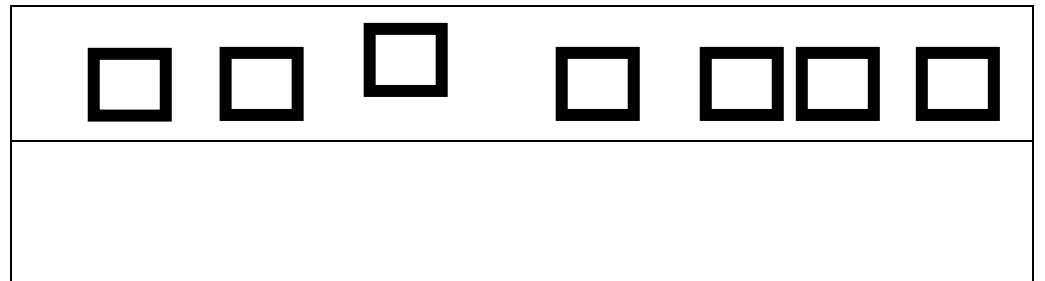
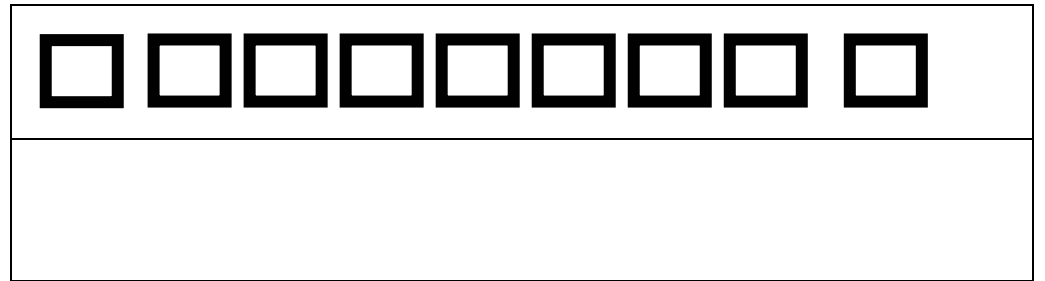
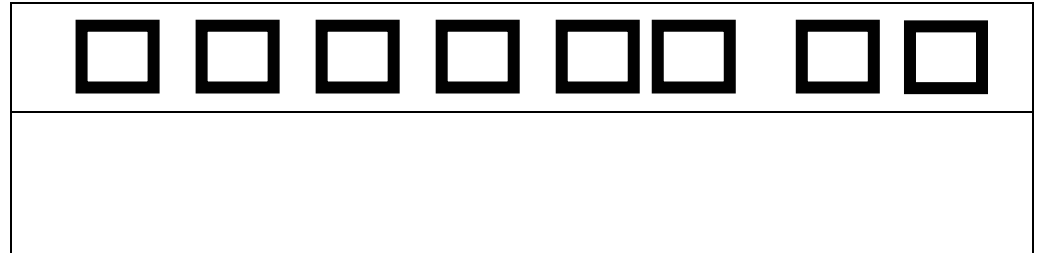
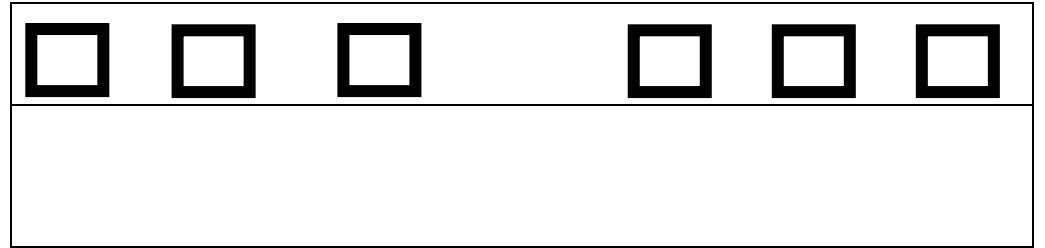
.....

complète le tableau


		
		
		
		
		
		




Dessine autant de triangles que de carrés




£ colle les formes qui conviennent


	6 
--	---

	8 
--	--

	10 
--	---

	9 
--	--


	7 
--	--





	5 
--	--

1 2 3 4 5 6 7 8 9 10



Compte et complète le tableau




			

1 2 3 4 5 6 7 8 9 10



% complète le tableau

	5	3	4	2
□				
○				
◇				
△				







Indique dans quelle case se trouve chaque figure

	A	B	C	D
1				△
2	◇		□	
3				
4			○	

△	○	□	◇



Dessine les formes dans le tableau

			
A,3	C,2	D,3	B,4

	A	B	C	D
1				
2				
3				
4				



Dessine

un carré

un rectangle

un triangle



£

□ □ □ □ □
□ □ □ □ □ □
□ □ □ □ □ □ □
△ △ △ △ △ △ △ △
△ △ △ △ △ △ △ △ △ △
◇ ◇ ◇ ◇ ◇
◇ ◇ ◇ ◇ ◇ ◇ ◇ ◇ ◇ ◇
◇ ◇ ◇ ◇ ◇ ◇
○ ○ ○ ○ ○ ○ ○ ○ ○ ○ ○
○ ○ ○ ○ ○ ○ ○ ○ ○ ○

%

△ △ △ △ △ △ △ △ △ △
△ △ △ △ △ △
○ ○ ○ ○ ○ ○ ○ ○ ○
○ ○ ○ ○ ○ ○ ○
◇ ◇ ◇ ◇ ◇ ◇ ◇ ◇
◇ ◇ ◇ ◇ ◇
□ □ □ □
□ □ □ □
□ □ □ □
□ □ □ □