

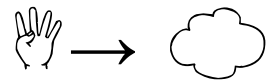
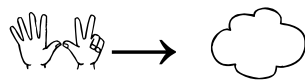
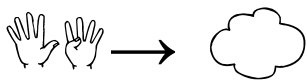
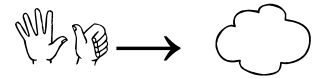
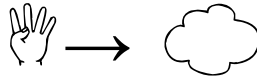
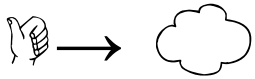
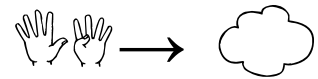
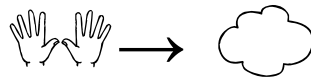
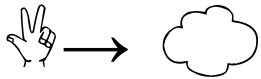
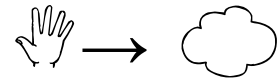
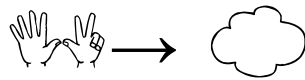
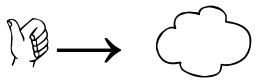




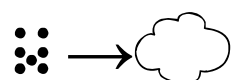
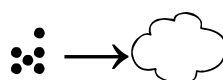
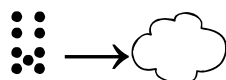
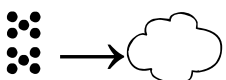
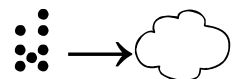
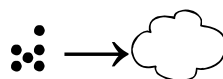
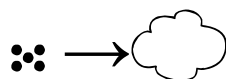
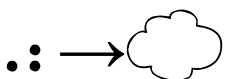
1) complète les dessins.

7 : ♥ ♥ ♥ ♥ ♥	10 : ♥ ♥ ♥ ♥ ♥ ♥ ♥ ♥ ♥ ♥
6 : ♥ ♥ ♥ ♥ ♥ ♥	4 : ✎ ✎ ✎ ✎
3 : ■ ■ ■	8 : ✎ ✎ ✎ ✎ ✎ ✎ ✎ ✎
9 : ✎ ✎ ✎ ✎ ✎ ✎ ✎ ✎ ✎	5 : ○ ○ ○ ○ ○
6 : ✎ ✎ ✎ ✎ ✎ ✎	8 : ○ ○ ○ ○ ○ ○ ○ ○
10 : ■ ■ ■ ■ ■ ■ ■ ■ ■ ■	9 : ○ ○ ○ ○ ○ ○ ○ ○ ○
4 : ♥ ♥ ♥ ♥	7 : ○ ○ ○ ○ ○ ○ ○

2) indique le nombre de doigts  → 

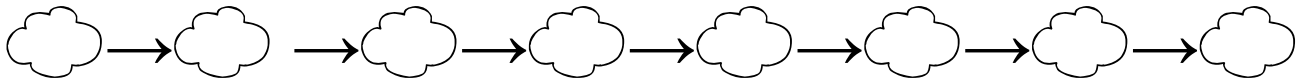
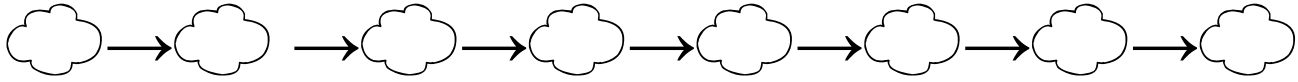
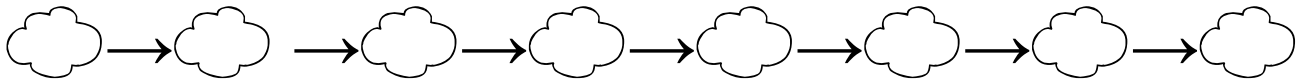


3) indique le nombre de points  → 




1	2	3	4	5	6	7	8	9	10	11	12	13	14	15	16	17	18	19	20
---	---	---	---	---	---	---	---	---	----	----	----	----	----	----	----	----	----	----	----


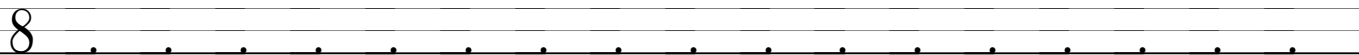
Compte de 2 en 2 en avançant avec tes doigts 



2) Trace à la règle, puis colorie



3) Ecris



a) relie

8

 ●	 ●
 ●	 ●
 ●	 ●
 ●	 ●
 ●	 ●

8

 ● ●	 ● ● ● ● ●
 ● ●	 ● ● ● ● ●
 ● ●	 ● ● ● ● ●
 ● ●	 ● ● ● ● ●

8

 ● ● ● ● ●	 ● ● ●
 ● ● ● ● ●	 ● ● ●
 ● ● ● ● ●	 ● ● ●

B) Complète

8

0 + ___	1 + ___	2 + ___
3 + ___	4 + ___	5 + ___
6 + ___	7 + ___	8 + ___

C) Complète

1	2	3	6	9	10	13	16	17
---	---	---	-----	-----	---	-----	-----	---	----	-----	-----	----	-----	-----	----	----	-----	-----

D) écriture

		9 9			
		10 10			

a) relie

9

9

9

B) Complète

9

$1 + \underline{\quad}$	$2 + \underline{\quad}$	$3 + \underline{\quad}$
$4 + \underline{\quad}$	$5 + \underline{\quad}$	$6 + \underline{\quad}$
$7 + \underline{\quad}$	$8 + \underline{\quad}$	$9 + \underline{\quad}$

9

C) Complète

1 5 9 12 14

Colorie :

- 5 bleu
- 6 vert
- 7 jaune
- 8 rouge
- 9 orange

Décompositions additives de 10. Date : _____

a) relie

10

10

10

B) Complète

10

1 + ___	2 + ___	3 + ___
4 + ___	5 + ___	6 + ___
7 + ___	8 + ___	9 + ___

10

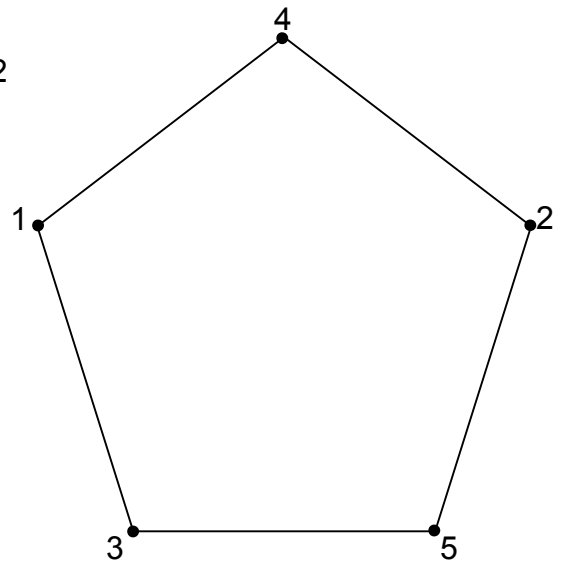
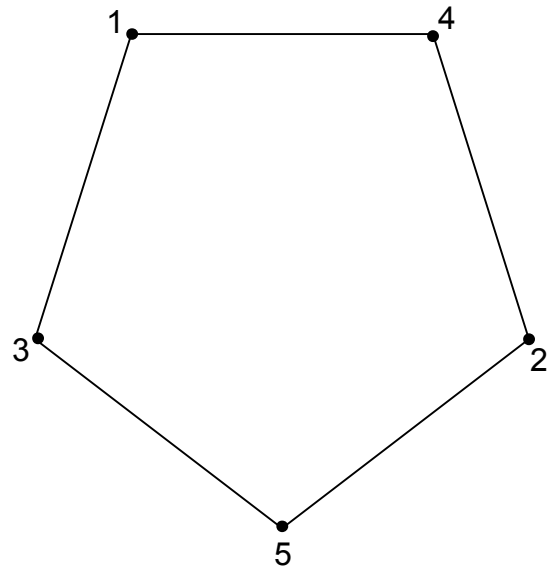
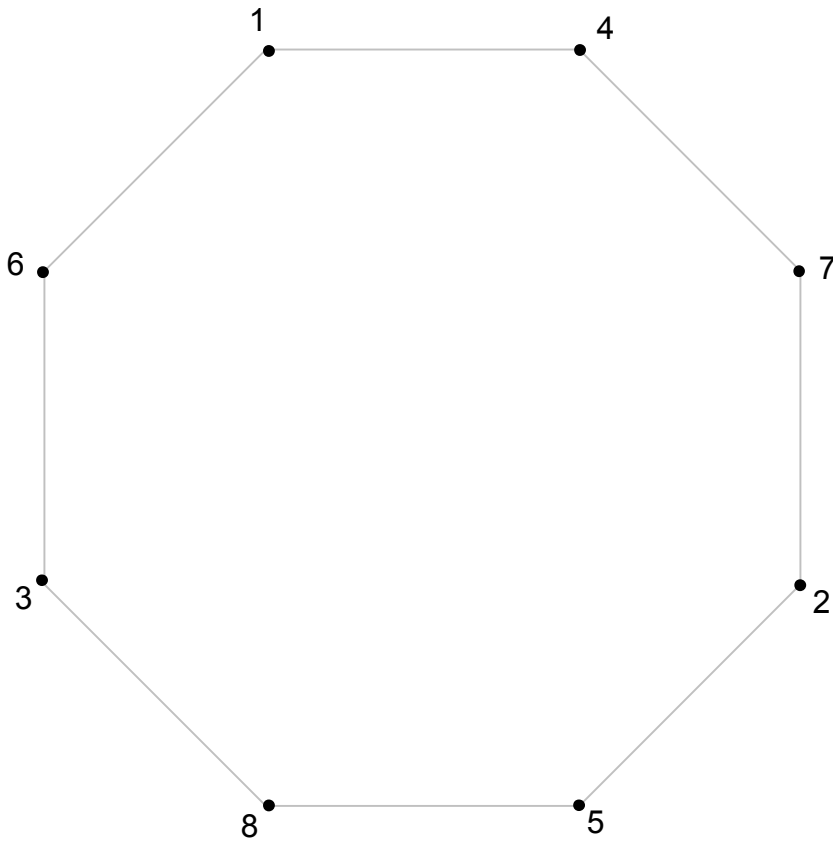
C) Complète

1	8	14	19	...
---	-----	-----	-----	-----	-----	-----	---	-----	-----	-----	-----	-----	----	-----	-----	-----	-----	----	-----


D) Calcule en avançant


$8 + 2 \text{ (hand icon)} = \underline{\quad}$	$7 + 2 \text{ (hand icon)} = \underline{\quad}$	$6 + 2 \text{ (hand icon)} = \underline{\quad}$	$1 \text{ (hand icon)} + 7 = \underline{\quad}$
$6 + 3 \text{ (hand icon)} = \underline{\quad}$	$7 + 3 \text{ (hand icon)} = \underline{\quad}$	$9 + 1 \text{ (hand icon)} = \underline{\quad}$	$1 \text{ (hand icon)} + 6 = \underline{\quad}$
$4 + 4 \text{ (hand icon)} = \underline{\quad}$	$5 + 5 \text{ (hand icon)} = \underline{\quad}$	$3 + 3 \text{ (hand icon)} = \underline{\quad}$	$2 + 2 \text{ (hand icon)} = \underline{\quad}$

1) Trace à la règle.



2) additions

4  + 6 = _____

5 + 3  = _____

4 + 4  = _____

3 + 3  = _____

5 + 5 = _____

2 + 2 = _____

3 + 4 = _____

4 + 5 = _____

7 + 2 = _____

8 + 2 = _____

9 + 1 = _____

4 + 2 = _____

5 + 3 = _____

7 + 1 = _____

0 + 8 = _____

2 + 5 = _____

1 + 6 = _____

7 + 3 = _____

4 + 3 = _____

2 + 5 = _____