




# Un petit calcul ?



## Règles du jeu



1. Choisis deux nombres.
2. Ecris l'addition sur ta fiche, et résous-la.
3. Choisis deux autres nombres et recommence encore et encore.
4. Attention!  
Chaque calcul doit être différent!



1

1	5	2	4
6	7	8	3
9	2	1	7
5	8	6	3

2

0	10	20	40
60	70	80	30
40	20	50	70
50	30	60	10

3

10	21	13	16
14	17	19	13
18	15	11	20
12	22	15	10

4

20	25	23	24
12	21	22	14
13	11	32	30
31	10	15	34

5

32	46	28	16
18	37	41	23
36	25	11	42
24	38	44	34

6

12	55	23	32
46	24	52	14
53	17	41	36
42	22	15	48

7

22	35	62	52
46	53	84	36
91	23	11	24
30	41	21	64

8

46	19	24	38
74	66	18	42
55	32	81	17
49	62	12	34

9

65	81	32	96
48	17	62	74
26	15	37	46
34	44	25	18

10

38	92	42	83
47	26	81	24
35	23	16	71
94	82	21	43



N°.....

Prénom:.....

## Un petit calcul ?

Voici mes calculs:

$..... + ..... = .....$

$..... + ..... = .....$

$..... + ..... = .....$

$..... + ..... = .....$

$..... + ..... = .....$

$..... + ..... = .....$

$..... + ..... = .....$

$..... + ..... = .....$

$..... + ..... = .....$

$..... + ..... = .....$

$..... + ..... = .....$

$..... + ..... = .....$

$..... + ..... = .....$

$..... + ..... = .....$

$..... + ..... = .....$

$..... + ..... = .....$

$..... + ..... = .....$

$..... + ..... = .....$

$..... + ..... = .....$

$..... + ..... = .....$

$..... + ..... = .....$

$..... + ..... = .....$

N°.....

Prénom:.....

## Un petit calcul ?

Voici mes calculs:

$..... + ..... = .....$

$..... + ..... = .....$

$..... + ..... = .....$

$..... + ..... = .....$

$..... + ..... = .....$

$..... + ..... = .....$

$..... + ..... = .....$

$..... + ..... = .....$

$..... + ..... = .....$

$..... + ..... = .....$

$..... + ..... = .....$

$..... + ..... = .....$

$..... + ..... = .....$

$..... + ..... = .....$

$..... + ..... = .....$

$..... + ..... = .....$

$..... + ..... = .....$

$..... + ..... = .....$

$..... + ..... = .....$

$..... + ..... = .....$

$..... + ..... = .....$

$..... + ..... = .....$



